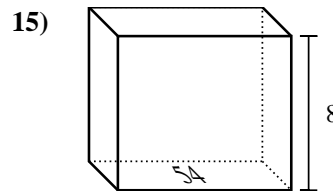
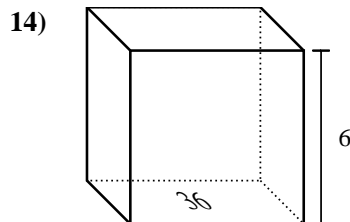
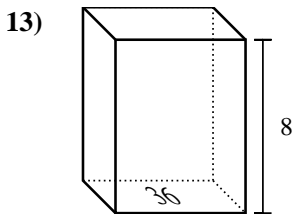
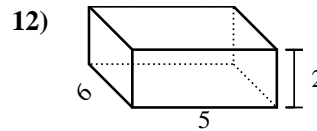
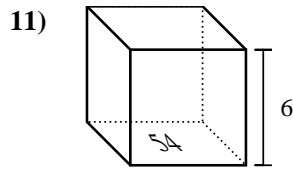
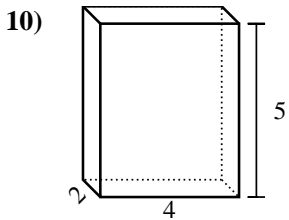
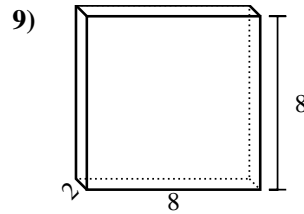
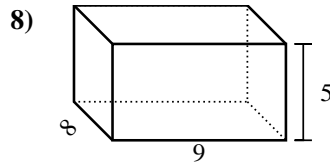
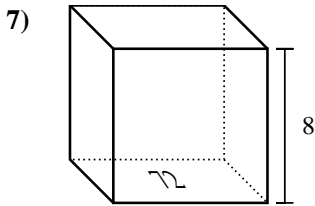
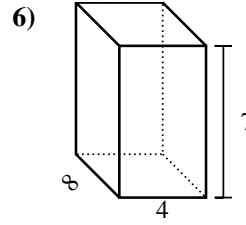
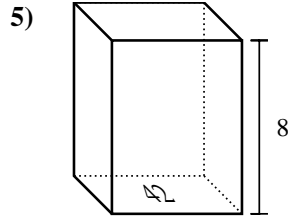
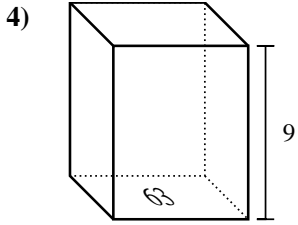
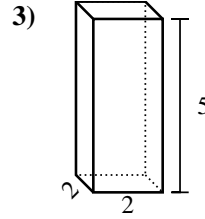
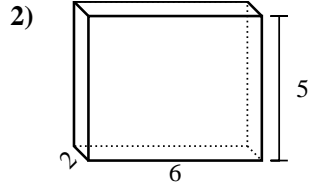
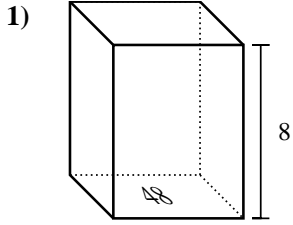




Find the volume of each rectangular prism. Units are in cm (not to scale). Remember  $V = BH$  and  $V = L \times W \times H$

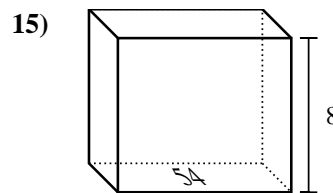
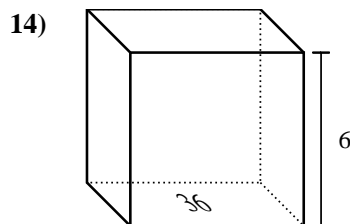
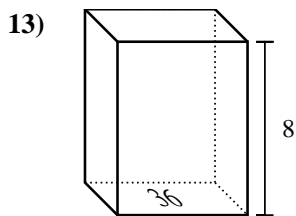
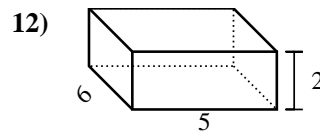
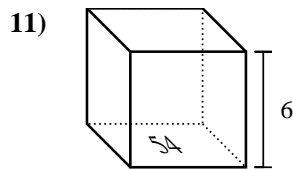
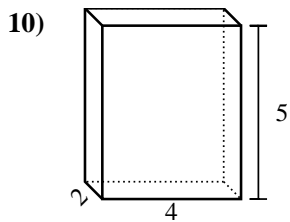
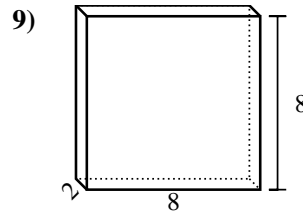
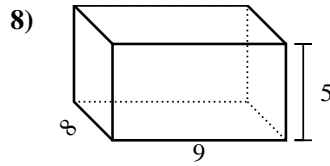
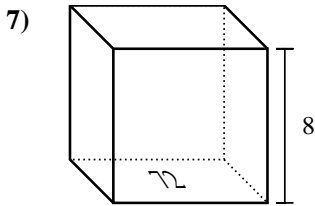
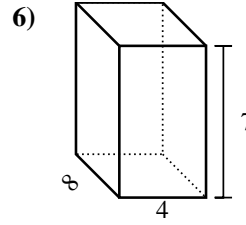
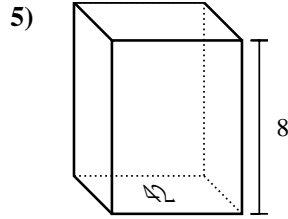
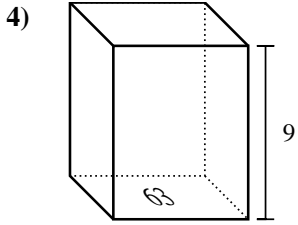
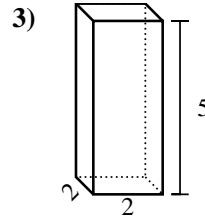
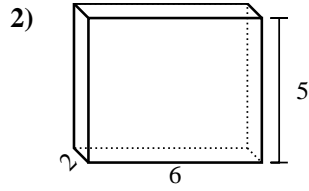
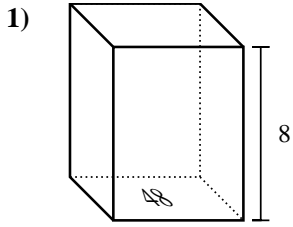
Answers



1. \_\_\_\_\_
2. \_\_\_\_\_
3. \_\_\_\_\_
4. \_\_\_\_\_
5. \_\_\_\_\_
6. \_\_\_\_\_
7. \_\_\_\_\_
8. \_\_\_\_\_
9. \_\_\_\_\_
10. \_\_\_\_\_
11. \_\_\_\_\_
12. \_\_\_\_\_
13. \_\_\_\_\_
14. \_\_\_\_\_
15. \_\_\_\_\_



Find the volume of each rectangular prism. Units are in cm (not to scale). Remember  $V = BH$  and  $V = L \times W \times H$



Answers

1. 384 cm<sup>3</sup>

2. 60 cm<sup>3</sup>

3. 20 cm<sup>3</sup>

4. 567 cm<sup>3</sup>

5. 336 cm<sup>3</sup>

6. 224 cm<sup>3</sup>

7. 576 cm<sup>3</sup>

8. 360 cm<sup>3</sup>

9. 128 cm<sup>3</sup>

10. 40 cm<sup>3</sup>

11. 324 cm<sup>3</sup>

12. 60 cm<sup>3</sup>

13. 288 cm<sup>3</sup>

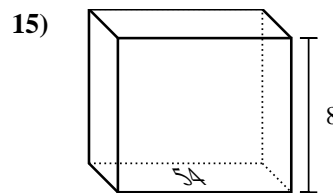
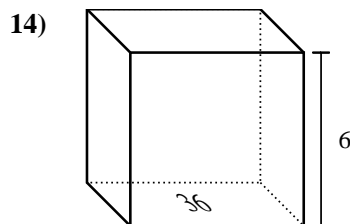
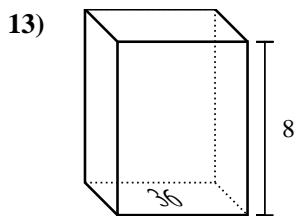
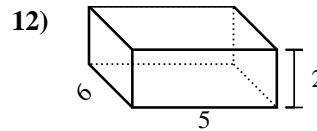
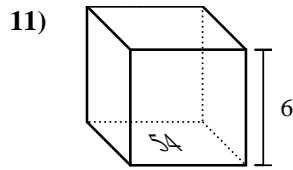
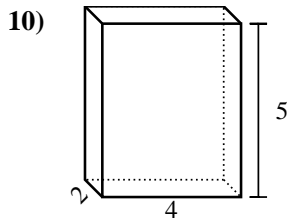
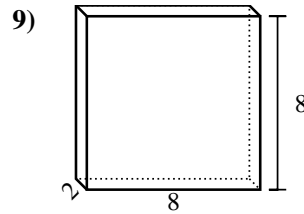
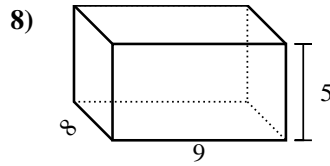
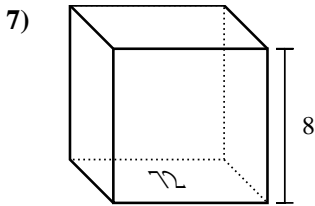
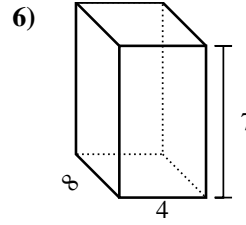
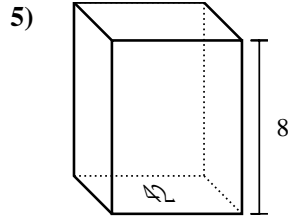
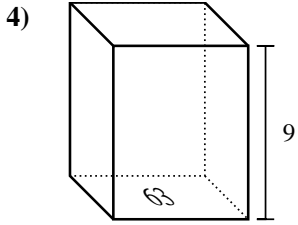
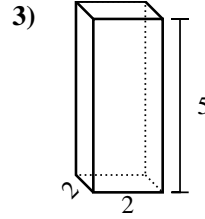
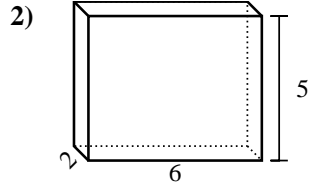
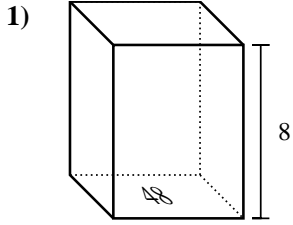
14. 216 cm<sup>3</sup>

15. 432 cm<sup>3</sup>



Find the volume of each rectangular prism. Units are in cm (not to scale). Remember  $V = BH$  and  $V = L \times W \times H$

Answers



1. \_\_\_\_\_
2. \_\_\_\_\_
3. \_\_\_\_\_
4. \_\_\_\_\_
5. \_\_\_\_\_
6. \_\_\_\_\_
7. \_\_\_\_\_
8. \_\_\_\_\_
9. \_\_\_\_\_
10. \_\_\_\_\_
11. \_\_\_\_\_
12. \_\_\_\_\_
13. \_\_\_\_\_
14. \_\_\_\_\_
15. \_\_\_\_\_